

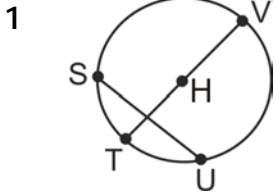
Name _____

Date _____

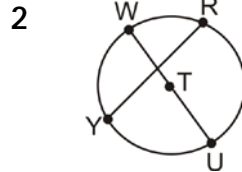
Area of the Circle - Worksheet 1

Simplify the equations using exponents

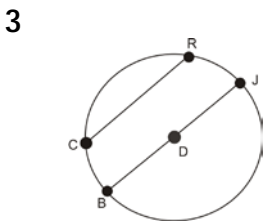
Find the area of the given circles. (Use π as 3.14)



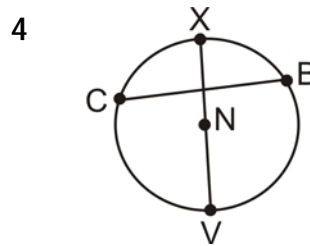
HV=1.3 _____



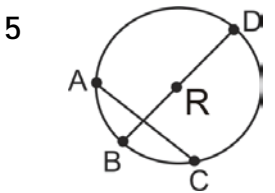
TU=4 _____



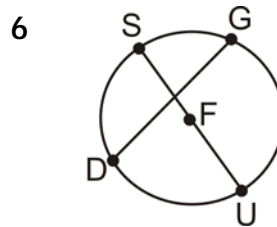
DJ=1.3 _____



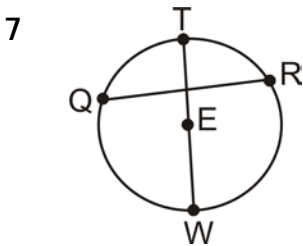
NV=2.3 _____



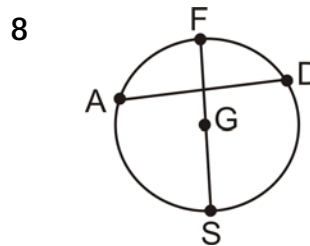
RD=3.2 _____



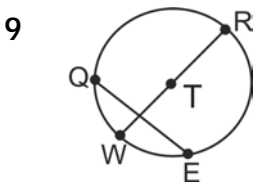
FU=4.2 _____



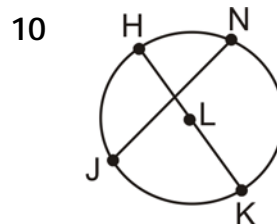
EW=1.6 _____



GS=6.5 _____



TR=5.2 _____



LK=7.2 _____